

# Key Signatures

Construct the following major key signatures.

C                      G                      B $\flat$                       E $\flat$                       A $\flat$                       D

F $\sharp$                       D $\flat$                       E                      A $\flat$                       A                      F

E                      A                      F                      C $\sharp$                       D                      B

Construct the following minor key signatures.

e                      g                      a $\sharp$                       d                      e                      b

f $\sharp$                       a                      e $\flat$                       c $\sharp$                       c                      f

c                      g $\sharp$                       d $\sharp$                       B $\flat$                       f $\sharp$                       d

Identify the following major key signatures.

Identify the following minor key signatures.

Key Signatures / pg. 2

Major keys

C G Bb Eb Ab D

F# Db E Ab A F

E A F C# D B

Minor keys

e g a# d e b

f# a eb c# c f

c g# d# Bb f# d

Major Keys

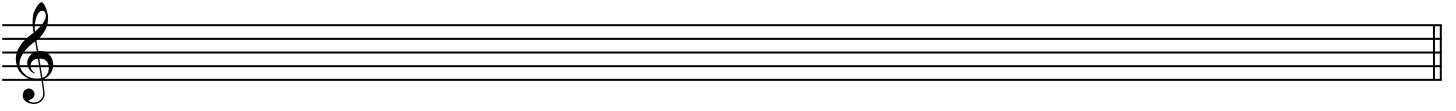
G F Bb D Ab E Eb A

Minor Keys


d c g# g e f# f b

# Scales (use accidentals not key signatures)

A major




B-flat natural minor




F-sharp harmonic minor




B melodic minor (ascending and descending)




G-flat major




C-sharp natural minor




D harmonic minor




E melodic minor



B major




E-flat natural minor



Scales

A major



B-flat natural minor



F-sharp harmonic minor




B melodic minor (ascending and descending)



G-flat major



C-sharp natural minor




D harmonic minor



E melodic minor



B major



E-flat natural minor



# Meter and Rhythm

Write in the time signature for each 2-measure example.

